


Number and Place Value

1



How many dogs are there?

2

What number is one less than ten?



3

$$2 + 2 + \boxed{} = 6$$



4

$$\boxed{} = 10 + 10$$



5

Jess is counting.

She says 23, 22, 21, 20

What number will she say next?



6

$$18 + 1 + 1 =$$



7 Find one less and one more than the numbers given.

One has been done for you.

1 less 1 more

← 8 →

← 20 →

← 29 →

2 marks

8 a) Write the missing number in the box.

b) Here is a number in words.

nineteen

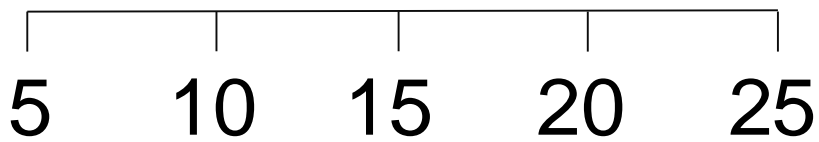
Write the same number in numerals.

9

$$20 - 5 - 5 =$$



10 Here is part of a number line.



Circle the number on the number line that is **more than** 20.



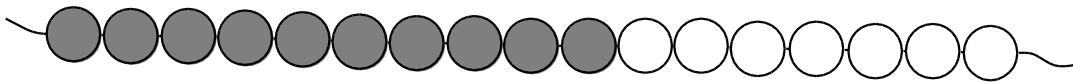
11

$30 - 10 =$



12

Here are some beads on a bead string.

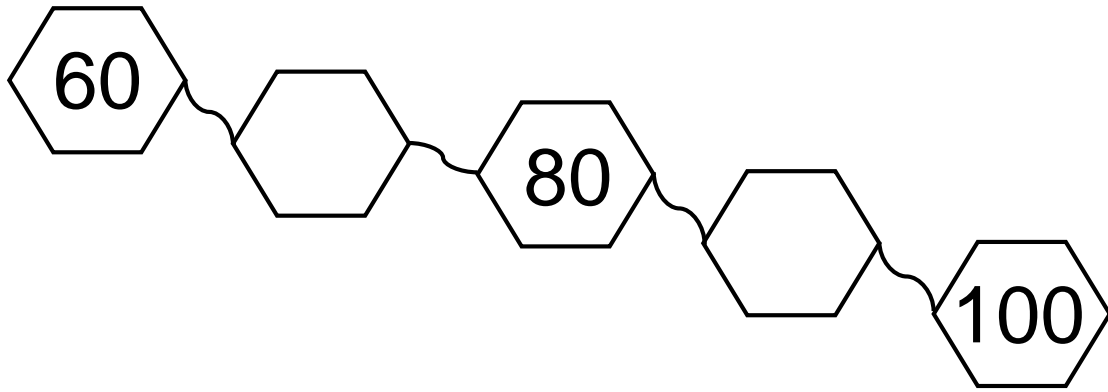


How many more beads are needed to make 20 altogether?

beads




13 Write the **two** missing numbers in this pattern.



14

$$79 + 1 =$$





How many steps did Tom count?

steps of 5

Total _____ / 17 marks